

Name \_\_\_\_\_




# Counting and Writing Numbers

Count the objects in each set. Next write the number on the line below.



Now write the number below

\_\_\_\_\_




Now write the number below

\_\_\_\_\_




Now write the number below

\_\_\_\_\_



Now write the number below

\_\_\_\_\_



Now write the number below

\_\_\_\_\_

Name \_\_\_\_\_



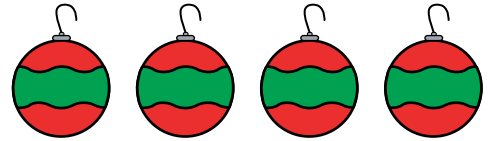
# Counting and Writing Numbers

Count the objects in each set. Next write the number on the line below.



Now write the number below

\_\_\_\_\_



Now write the number below

\_\_\_\_\_



Now write the number below

\_\_\_\_\_



Now write the number below

\_\_\_\_\_



Now write the number below

\_\_\_\_\_